




3. Add or subtract.


Circle the animal with the number 767.


Cross out the animal with the greatest number.

$$\begin{array}{r} 117 \\ + 81 \\ \hline \end{array}$$


$$\begin{array}{r} 248 \\ - 148 \\ \hline \end{array}$$


$$\begin{array}{r} 963 \\ - 222 \\ \hline \end{array}$$


$$\begin{array}{r} 755 \\ + 12 \\ \hline \end{array}$$


$$\begin{array}{r} 878 \\ - 101 \\ \hline \end{array}$$


$$\begin{array}{r} 757 \\ + 220 \\ \hline \end{array}$$
